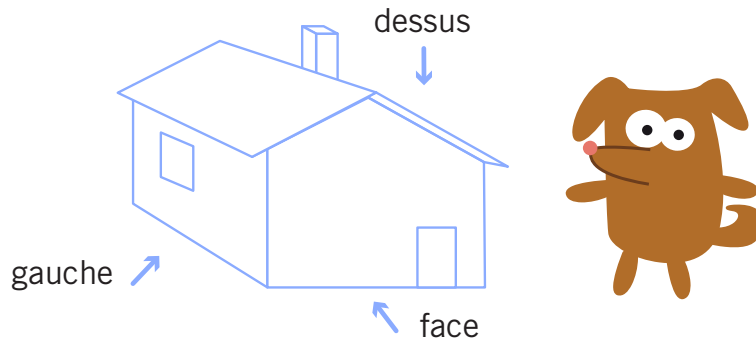
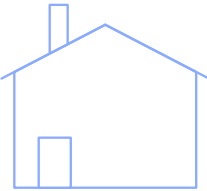
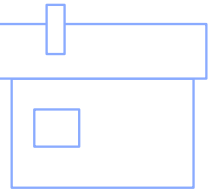
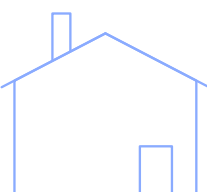
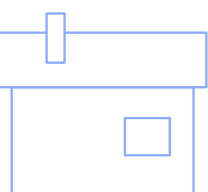
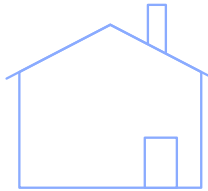
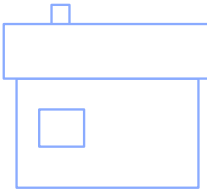

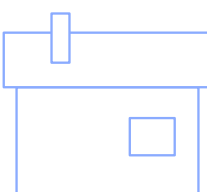
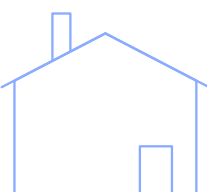
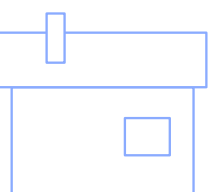



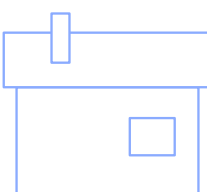




La maison représentée ci-dessous est dessinée en perspective.



Consignes :

- a) On a fait 4 plans de cette maison. Un seul est exact. Indique le numéro du bon plan.
- b) Sur chacun des autres plans, une des vues de la maison est exacte. Colorie-la en bleu.

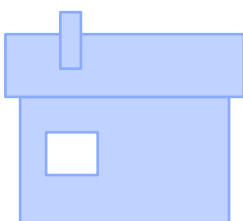
  <div style="font-size: 2em; font-weight: bold; margin: 10px 0;">1</div>  	  <div style="font-size: 2em; font-weight: bold; margin: 10px 0;">2</div>  
  <div style="font-size: 2em; font-weight: bold; margin: 10px 0;">3</div>  	  <div style="font-size: 2em; font-weight: bold; margin: 10px 0;">4</div>  



**Corrigé pour les parents**

a) le bon plan est le plan 2

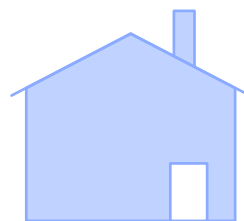
b)



plan 1



plan 3



plan 4